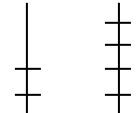




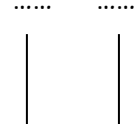




1. Συνεχίζω όπως στο παράδειγμα.

24	→		$20 + 4$	2 Δεκάδες 4 Μονάδες
		2 4		
32	→	
41	→	
55	→	
20	→	
17	→	
43	→	
15	→	



2. Γράφω το αποτέλεσμα των πράξεων.

$15 - 5 = \underline{\quad}$

$16 - 6 = \underline{\quad}$

$24 - 4 = \underline{\quad}$

$22 - 2 = \underline{\quad}$

$19 - 9 = \underline{\quad}$

$35 - 5 = \underline{\quad}$

$31 - 1 = \underline{\quad}$

$57 - 7 = \underline{\quad}$

$17 - 7 = \underline{\quad}$

$18 - 8 = \underline{\quad}$



35

1. Υπολογίζω και συμπληρώνω τους αριθμούς που λείπουν.

$2 + 5 + 1 = \underline{\quad}$

$4 + 2 + \underline{\quad} = 9$

$3 + 2 + 3 = \underline{\quad}$

$4 + 3 + \underline{\quad} = 8$

$4 + 1 + 5 = \underline{\quad}$

$5 + 2 + \underline{\quad} = 10$

$1 + 7 + 1 = \underline{\quad}$

$6 + 1 + \underline{\quad} = 9$

$2 + 6 + 1 = \underline{\quad}$

$2 + 3 + \underline{\quad} = 7$

